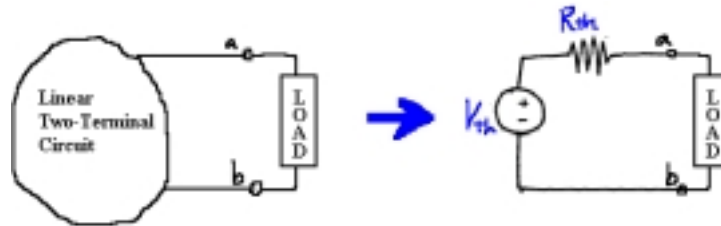


Class note 12: Thevenin's Theorem

A. Introduction

1. Thevenin's theorem states that a linear two-terminal circuit can be replaced by an equivalent circuit consisting of a voltage source ("Thevenin voltage"), V_{th} , in series with a resistor ("Thevenin resistor"), R_{th} .



2. The theorem was developed in 1883 by Leon Thevenin, a French telegraph engineer.
3. The circuit to the left of the terminals a and b is known as the *Thevenin Equivalent Circuit*.

B. How to draw V_{th} and R_{th}

1. Thevenin voltage V_{th} is the open-circuit voltage at the terminals.
Method: Find the voltage at the terminals which are opened.
2. R_{th} is the equivalent resistance at the terminals. (3 methods to choose)

(a) Input Resistance Method

- i). Use this method when all the sources are independent ones.
- ii). Deactivate all the independent sources (by replacing a voltage source by short circuit, and a current source by open circuit).
- iii). Find the equivalent resistance seen from the terminals --> R_{th}

(b) Short Current Method

- i). Use this method in any circuit situation except when there are only dependent sources.
- ii). Short the terminals. Note that this action may bring a dramatic change in the circuit elements. For example, a resistor in parallel with the terminals has to be changed to an open circuit when the terminals are shorted, since all current will flow through the shorted path ($R=0$).
- iii). Find the short circuit current (I_{sc}) through the shorted terminals.
- iv). Note that there should not be source deactivation.

$$v). R_{th} = \frac{V_{th}}{I_{sc}}$$

(b) Test Voltage Method

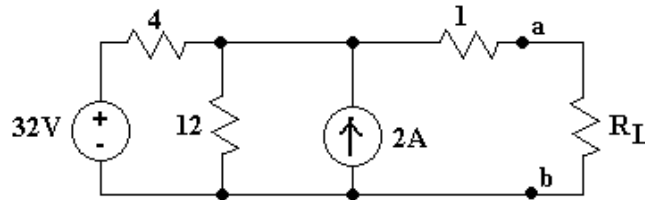
- i). Use this method in any circuit situation. No restriction.
- ii). Deactivate all independent sources.
- iii). Apply a test voltage (V_T) to the terminals of the circuit.

iv). Find the current flowing to the circuit from the test voltage source (I_T). Note that the test current should be found in terms of the test voltage. Since the Thevenin resistance is the ratio of the test voltage and the test current.

v). $R_{th} = \frac{V_T}{I_T}$

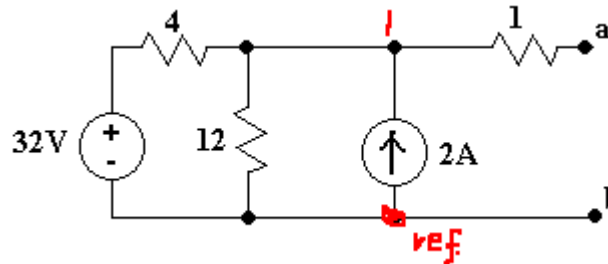
C. "Input Resistance Method" application Example

Find the Thevenin equivalent circuit of the circuit shown below, to the left of the terminals *a* and *b*. Then, find the current through the load resistor $R_L = 6 \Omega$.



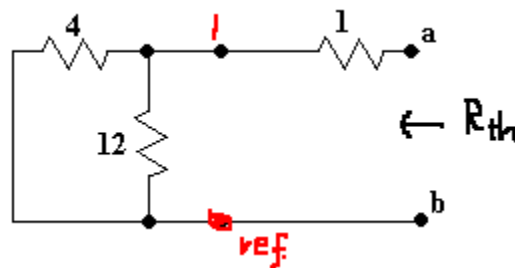
Solution:

(a) Finding V_{th} : Open-circuit voltage. Since two terminals *a* and *b* are open, there is no current flowing through 1Ω resistor. If we apply the node-voltage method, the open circuit voltage is the same as the node voltage V_1 .



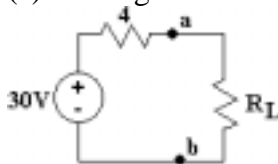
Therefore, @node 1: $\frac{V_1 - 32}{4} + \frac{V_1}{12} - 2 = 0 \rightarrow V_1 = 30 \text{ V} \rightarrow V_{th} = 30 \text{ V}$

(b) Finding R_{th} : After deactivating independent sources, we have,



Therefore, $R_{th} = R_{ab} = 1 + (4 // 12) = 1 + 3 = 4 \Omega$

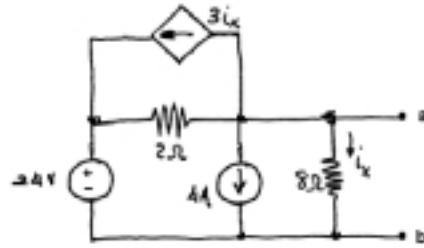
(c) Finding the load current: The final equivalent circuit with the load is reduced to:



Therefore, $I_L = \frac{30}{4 + 6} = 3 \text{ [A]}$

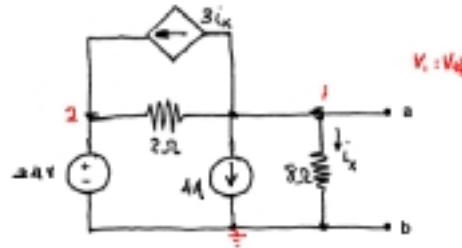
D. "Short Current Method" application Example

Find the Thevenin equivalent circuit of the following circuit.



Solution:

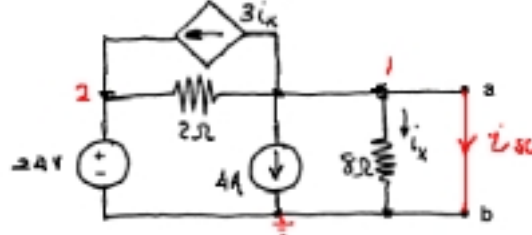
(a) Derivation of V_{th} .



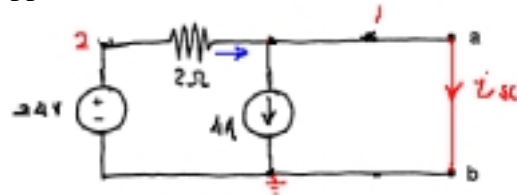
Constraints: $V_2 = 24$; $i_x = \frac{V_1}{8}$

@ node 1: $\frac{V_1 - 24}{2} + 4 + \frac{V_1}{8} + 3 \cdot \frac{V_1}{8} = 0 \rightarrow V_1 = 8 \text{ [V]} = V_{th}$

(b) First, two terminals a and b are shorted to find the short current I_{sc} .



When a and b are shorted out, there is no current through 8Ω resistor, therefore, $i_x = 0$. Hence, the dependent source disappears from the circuit. Therefore, the circuit has changed to:

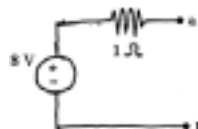


The circuit is very weird, but somehow we may apply node-voltage equation like:

$$\frac{24}{2} = 4 + I_{sc}, \text{ so } I_{sc} = 8.$$

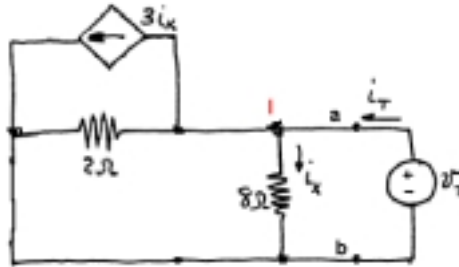
Therefore $R_{th} = 8/8 = 1 \text{ [}\Omega\text{]}$

So, the Thevenin equivalent circuit is:



E. "Test Voltage Method" Application (from the above example)

Derivation of R_{th} by Test Voltage Method: After deactivation of the independent sources, we have the following circuit.

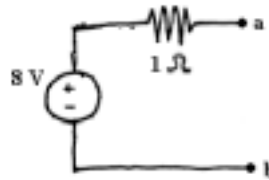


Constraint: $i_x = \frac{V_1}{8}$, $V_1 = V_T$.

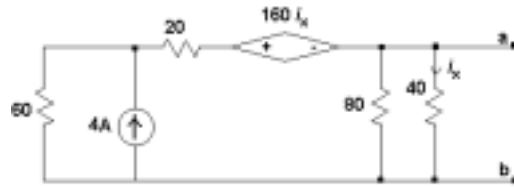
Applying KCL at node 1: $I_T = i_x + \frac{V_T}{2} + 3i_x = \frac{8V_T}{8} = V_T$

Therefore, $R_{th} = \frac{V_T}{I_T} = 1$

So we have the same Thevenin equivalent circuit, like this.

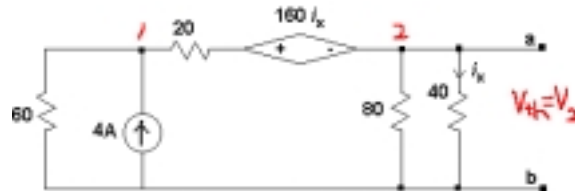


F. Another Thevenin equivalent circuit problem.



SOLUTION

(a) V_{th} derivation: Open-circuit voltage

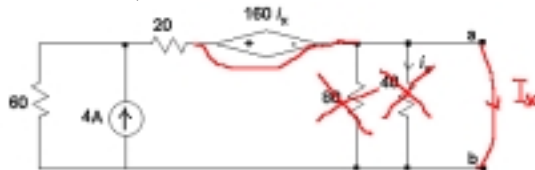


Constraint: $i_x = \frac{V_2}{40}$, therefore $160i_x = 4V_2$

@ node 1: $\frac{V_1}{60} - 4 + \frac{V_1 - V_2 - 4V_2}{20} = 0$ -----(1)

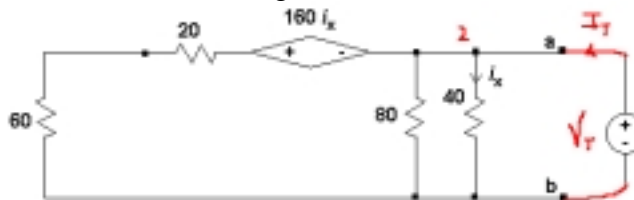
@ node 2: $\frac{V_2}{80} + \frac{V_2}{40} + \frac{V_2 - V_1 + 4V_2}{20} = 0$ -----(2) From (1) and (2): $V_2 = V_{th} = 30$ [V]

(b) Derivation of R_{th} by Short Current Method: If you short the terminal, then the circuit becomes like below: (Remember $i_x = 0$)



By current-division, we have: $I_{sc} = 4 \cdot \frac{60}{60 + 20} = 3$ Therefore, $R_{th} = 30/3 = 10$ [Ω]

(c) Derivation of R_{th} by Test Voltage Method: After deactivation of the independent source and applying a test voltage, we have the following circuit.



Constraint: $i_x = \frac{V_T}{40}$, therefore $160i_x = 4V_T$

Applying KCL @ node 2: $I_T = \frac{V_T}{80} + \frac{V_T}{40} + \frac{V_T + 4V_T}{80}$, from this $\frac{V_T}{I_T} = 10 = R_{th}$

(d) Final Thevenin equivalent circuit?

